



SUREKEY EXAMINATIONS BOARD


PRIMARY FOUR LPTE PREPARATION SET TWO 2023

SOCIAL STUDIES WITH RELIGIOUS EDUCATION MARKING GUIDE

PREPARED BY:

MR. MUBIRU SULAIMAN: 0700 758668

MR. WASIGE PAUL: 0701435176



P.4



SUREKEY EXAMINATIONS BOARD

OFFICIAL COMMENCEMENT OF

LOWER PRIMARY TRANSITIONAL Examinations

2023 October 16th – 19th

Let Quality speak for itself

© 2023 Sure Key Examinations Board 0700758668



SUREKEY EXAMINATIONS BOARD
Presents



P.4 LOWER PRIMARY TRANSITIONAL Examinations

30,000/=
Online
Registration
Fee

2023 October 16th – 19th

The Surekey Lower Primary Certificate of Education (LPCE) Examination for the 2023 junior candidates will officially start on 16th October 2023.
THEME: "Preparing quality learners for Upper Primary"
Schools interested should register with Surekey Examinations Board before 5th June 2023. Online registration is also available at 20,000/= per junior candidate. For inquiries, contact 0700758668 / 0774088304 / 0755887056

Let Quality Speak for Itself

Visit: <https://surekeyexamination.com/> TO REGISTER YOUR CHILD

© 2023 Sure Key Examinations Board Lower Primary Transitional Examinations

"Don't speak for Quality, Let the Quality Speak for itself"

© 2023 Surekey Examinations Board - SKEB

SECTION A: 40 MARKS

1. Name any **one** domestic animal kept for beef.
 - Cow / goat / sheep / camel / rabbit / pig
2. Name the landform that covers the largest part of your district.
 - Plateau
3. Give any **one** local way of preserving fish from going bad.
 - Smoking
 - Salting
 - Sun drying
4. Name any **one** country that borders Uganda.
 - South Sudan
 - Rwanda
 - Kenya
 - Democratic Republic of Congo
5. What is the direction of Lake Kyoga from Lake Victoria?
 - North
6. Mention any **one** economic activity that is carried out on Lake Katwe.
 - Tourism
 - Salt Mining
7. Give **one** way children can help to keep security at home.
 - By reporting wrong doers and strangers
 - By closing windows and doors
 - By following rules and regulations
 - By respecting others
 - By loving others
 - By asking for forgiveness
 - By forgiving others
 - By sharing
 - By staying home at night
8. Which weather instrument helps farmers to know the amount of rainfall received in their area?
 - Rain gauge
9. Mention any **one** place in your area where people can buy basic needs.
 - Supermarket
 - Drugshops
 - Stalls
 - Shops
 - Pharmacy
 - Clinics
 - Markets
 - Kiosk
 - Hospitals
10. Name any **one** tribe that belongs to the Bantu in Uganda.
 - Baganda
 - Batooro
 - Bakiga
 - Basoga
 - Banyankole
 - Bagisu
11. How does the heading of a map help a map reader?
 - It tells a map reader what the map is all about
12. How are trees in a school compound useful to pupils?
 - They provide shade
 - They provide fruit
 - They provide firewood used for cooking food


13. Name any **one** food crop that grows well in swamps.

- Rice
- Tomatoes
- Garden eggs
- Eggplant
- Coco yams

14. How are nimbus clouds useful to farmers in your Sub-county?

- They give us rain

15. What does the road sign below mean?



- School ahead

16. Why is air transport used by very few people in your district?

- It is expensive in terms of costs

17. State any **one** way of getting leaders in your school.

- Through appointment
- Through elections

18. Name any **one** of the tools used in schools to change from one daily activity to another.

- Timetable
- A bell

19. Why are pupils advised to burn polythene bags and plastics at school?

- They pollute the environment
- They lead to soil infertility
- They cause infiltration

20. Name the school symbol that locates a school.

- A school signpost

21. State any **one** problem an area would face if it received no rain for a long period of time.

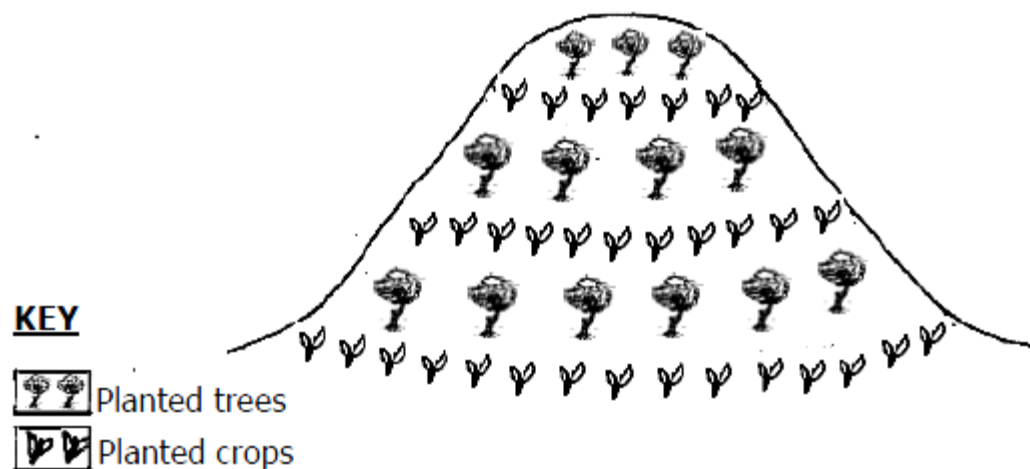
- Shortage of water
- Shortage of pasture
- Wilting of crops
- Too much dust
- High temperature during day
- Desertification

22. State any **one** use of a village radio in our community.

- Provides information
- Provides jobs
- Advertises goods
- Source of revenue

23. Give the meaning of the term vegetation.
- **This is the plant cover of an area**
24. Name the highest mountain that has snow in Uganda.
- **Mount Rwenzori**

The diagram below shows a method of farming practiced in mountainous areas. Use it to answer questions **25** to **27**.



25. Name any **one** method of farming practiced in the mountainous area above.
- **Contour ploughing**
26. Give **one** reason why people plant trees on the above mountain slopes.
- **To control landslide**
 - **To control strong wind**
 - **To provide shade to crops**
27. Name the line of latitude marked 0° .
- **Equator**
28. How are the Bagisu similar to the Bakonzo in terms of settlement?
- **Both live in mountain slopes**
29. Which type of family excludes uncles?
- **Nuclear family**
30. How are class rules and regulations important?
- **Promote order in a class**
 - **Promote my morals**
 - **Promote unity and cooperation**
 - **Promote hardworking and competition**
 - **Lead to good performance**
 - **Promote peace and security**
 - **Promote sanitation**
31. State any **one** way a father can control poverty in his home.
- **By trading**
 - **By growing crops**
 - **By keeping animals**
 - **By rearing birds like chicken**
 - **By budgeting**
32. Give any **one** use of water in industries.
- **For cooling machines**
 - **For mixing chemicals**
 - **For making drinks or beverages**

33. What was the main occupation of the Bantu?
- **Cultivation / farming / Crop growing.**
34. Name any **one** Island district found in Lake Victoria.
- **Buvuma**
 - **Kalangala**
35. State any **one** way the Local Council One (L.C I) committee promotes security in the community.
- **By arresting criminals and suspect**
 - **By setting bylaws**
 - **By advising community members to clear bushes around homes.**
 - **By discouraging movements at night**
 - **By organizing road blocks at night**
 - **By promoting reconciliation (peace talks, arbitration)**
 - **By organizing security meetings**
 - **By patrolling at night**

For each of the questions **36** to **40**, answer **Either** the Christian **OR** Islamic questions but **not** both. No **marks** will be awarded to a candidate who attempts both alternatives in **a particular number**.

36. **EITHER:**
Name the son of Jacob who was sold by his brothers to Egyptian traders.
- **Joseph**
- OR:**
Name the son of Prophet Yaqubu who was sold by his brothers to Egypt.
- **Yusuf**
37. **EITHER:**
How did Abraham show his faith to God?
- **He accepted to sacrifice Isaac**
 - **He accepted to change his name**
 - **He accepted to leave his homeland**
 - **He accepted to circumcise**
- OR:**
How did Prophet Ibrahim show his faith to Allah?
- **He accepted to sacrifice Ismael**
 - **He accepted to change his name**
 - **He accepted to leave his homeland**
 - **He accepted to circumcise**
38. **EITHER:**
What was the work of Matthew before he became an apostle?
- **Collecting taxes /He was a tax collector**
- OR:**
What was the work of Hadijah, the wife of Prophet Muhammad?
- **Trading / She was a trader / Business woman.**

39.

EITHER:

How can a Christian child show kindness to the sick people?

- By praying for them
- By washing clothes for them
- By supporting them to move
- By Washing utensils for the sick people
- By reminding them to take medicine
- By fetching water for them
- By cooking food for them

OR:

How can a Muslim child show kindness to the sick people?

- As above

40.

EITHER:

Why is the Bible called a book of generations?

- It was written at different times by different authors inspired by the holy spirit.
- It was used by other generations and it is still being used.
- Its teachings apply to all people of different generations.

OR:

Why is the Koran called a book of all generations?

- It was written at different times by different authors guided by Allah.

SECTION B: 60 MARKS

41.

a) Mention any **two** examples of cultural leaders in the community.

- Clan leaders
- Traditional leaders like kings, chiefs

b) How do cultural leaders come to power?

- Through inheritance

c) State any **one** role of cultural leaders in the community.

- They implement government programs
- They organise clan meeting
- Teach morals
- They allocate land among clan members
- Settle disputes among clan members
- They guide and counsel clan members
- Promote peace and security
- They teach and promote culture

42.

a) Write down any **two** advantages of having very many pupils in a school.

- There is enough labour
- It provides a supportive learning community.
- Students and pupils have more opportunity to partner with.
- Questions are answered more quickly on Piazza or a message board.

- Students and pupils can learn from their peers.
- There is promotion of talent
- There is diversity of opinion

b) State any **two** problems caused by having a very big number of pupils in a school.

- Congestion
- Shortage of food
- Poor performance
- Low engagement of pupils
- Shortage of seats
- Shortage of teachers
- Easy spread of diseases
- Poor delivery of education service
- Low attention level
- Low level of cooperation
- Shortage of facilities at school

43. a) What term is given to mean the freedoms children must enjoy to live a better life?

- Children's rights

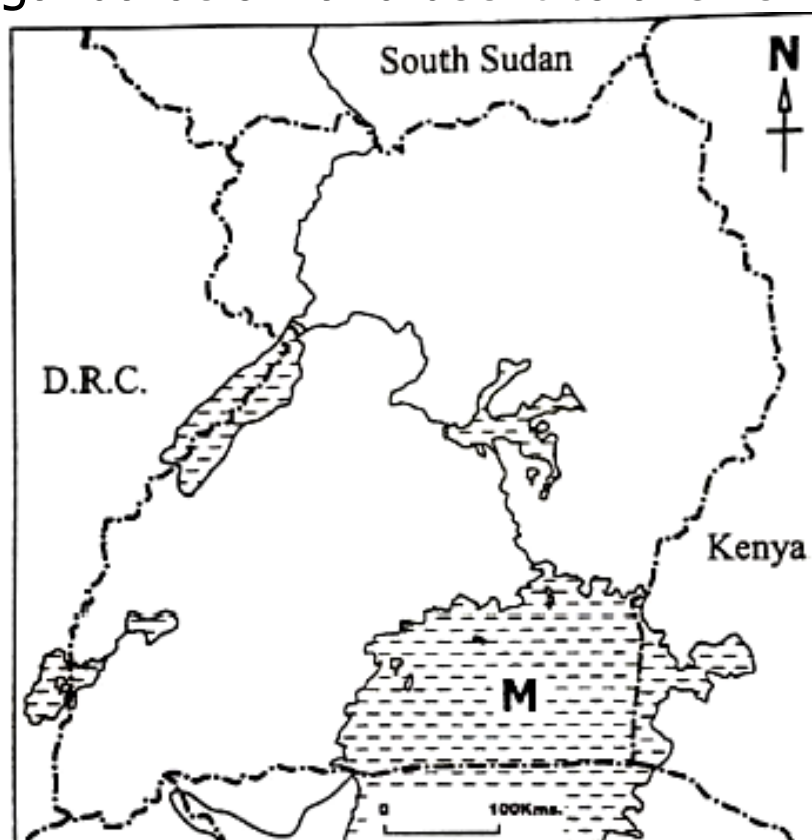
b) Give any **two** ways freedoms of children are violated in the society.

- Through kidnapping
- Through defilement
- Through raping
- Through child sacrifice
- Through child battering
- Through child labour
- Through denial of food
- Through denial of medical care
- Through denial of clothes
- Through denial of education

c) State any **one** cause of violation of children's freedoms.

- Death of biological parents
- Alcoholism
- Drug abuse
- Indiscipline among children
- Lack of strict laws against child abuse
- Ignorance
- High rate of illiteracy
- Some traditional cultural practice

44. Study the map of Uganda below and use it to answer the questions that follow.



- a) Name lake marked **M**.
 - Lake Victoria
 - b) Mention any **two** economic activities carried out on Lake marked **M**.
 - Fishing
 - Mining
 - Tourism
 - Trade
 - Water transport
 - Cultivation on lake shores
 - Keeping cattle on lake shores
 - c) Identify any **one** element of a good map on the map drawn above.
 - Title
 - Map frame
 - Compass direction
- 45.
- a) Mention any **two** components of planted vegetation.
 - Planted flowers
 - Planted trees
 - Crops
 - Planted grass
 - c) State any **two** ways of caring for planted vegetation at home.
 - By Watering
 - By fencing
 - By spraying to kill crop pests
 - By weeding
 - By staking
 - By thinning
- 46.
- a) State any **two** roles of security organs in our district.
 - To patrol at night
 - To guard important people
 - To investigate crimes
 - To stop riots
 - To guard important building
 - To arrest criminal and suspects
 - To stop big fire
 - To rescue people
 - b) Give any **two** problems faced by the security organs while performing their duties.
 - Accidents
 - High rate of corruption
 - Mob justice
 - Bad weather
 - Delay of payment
 - Poor salary
 - Handling emergency with quick decisions
 - Maintaining high level of vigilance
 - Handling emergency with quick decisions
 - Maintaining high level of vigilance
 - Dealing with aggressive individuals
 - Keeping up with changing technology and security system
 - Poor feeding
 - Harassment by bosses
 - Attacks from terrorists
 - Poor transport facilities
 - Handling criticism from public
 - Managing stress and emotions

47. a) Mention any **two** weather instruments found at a weather station.
- Anemometer
 - Windvane
 - Sunshine recorder
 - Hygrometer
 - Hydrometer
 - Barometer
 - Six's thermometer
 - Rain gauge
- b) Name the wooden house where delicate weather instruments are kept at a weather station.
- Stevenson screen
- c) Which element of weather helps farmer's crops to grow well?
- Rainfall

48. The diagram below is of a National flag that is raised in most of schools Compound. Use it to answer the questions that follow.



- a) Name the country whose flag is shown above.
- Uganda
- b) Name any **two** colours you usually see on the above flag.
- Black
 - Red
 - Yellow
- c) Name **one** group of people that are usually responsible for raising up the above flag every morning on school assemblies.
- Scouts and girl guides
49. a) Write down any **two** common accidents at home.
- Falls
 - Snake bites
 - Dog bites
 - Slips
 - Cuts
 - Scalds
 - Burns

- b) State any **two** ways children can be protected from accidents at home.
- By clearing bushes at home
 - Encourage safe games
 - By keeping drugs away from children reach
 - By discouraging children from climbing trees
 - By taking extra care for babies
 - By picking Sharp objects like nails
 - By removing broken bottles
 - By covering hot liquids

50. a) Apart from a school signpost, name any **two** other school symbols.
- A school badge
 - A school motto
 - A school anthem
 - A school name
 - A school mission
- b) Give any **one** way a school is important to the community around it.
- Provides education service
 - Provides jobs
 - Provides market for local products
 - Provides security to neighborhood
 - Provides transport service
 - Provides space for parties
- b) State any **one** way school symbols are important to community members.
- They are used for identification

For each of the questions **51** to **55**, answer **EITHER** the Christian **OR** Islamic questions but **not** both. **No mark** will be awarded to a candidate who attempts both alternatives in **a particular number**.

51. **EITHER:**

- a) According to the Bible, who was the first female to live in the garden of Eden?
- Eve
- b) From what did God create the first female on earth?
- Adam's rib
- c) Name the first **two** sons of the first female God created.
- Cain
 - Abel

OR:

- a) According to the Quran, who was the first female to live on earth?
- Hawa
- b) From what did Allah create the first female on earth?
- Adam's rib
- c) Name the first **two** sons of the first female Allah created.
- Habil
 - Qabil

52. **EITHER:**

- a) Mention any **two** examples of good leaders in the Old Testament.
- | | | |
|------------|-----------|-----------|
| • Moses | • Joshua | • Saul |
| • Jeremiah | • Abraham | • Daniel |
| • Elijah | • David | • Solomon |
| • Elisha | • Samuel | |
- b) Name the leader in the Old Testament who baptized the Messiah.
- John the Baptist
- c) Write down any **one** quality of a good religious leader.
- | | |
|--------------------------|-------------------------|
| • Should be humble | • Should be loyal |
| • Should be hardworking | • Should be kind |
| • Should be approachable | • Should be trustworthy |
| • Should be God fearing | • Should be educated |
| • Should be faithful | • Should be ordained |

OR:

- a) Mention any **two** examples of good leaders in the Koran.
- | | |
|--------------------|----------------|
| • Prophet Muhammad | • Ali |
| • Prophet Isa | • Abu Bakr |
| • Prophet Dauda | • Prophet Musa |
| • Uthman | |
- b) Name the leader in the Koran who built the Holy Kaaba.
- Prophet Ibrahim
- c) Give any **one** quality of a good Muslim leader.
- | | |
|--------------------------|-------------------------|
| • Should be humble | • Should be loyal |
| • Should be hardworking | • Should be kind |
| • Should be approachable | • Should be trustworthy |
| • Should be God fearing | • Should be educated |
| • Should be faithful | |

53. **EITHER:**

- a) Who was the mother of Jesus Christ?
- Mary/Virgin Mary/Maria
- b) In which town did Jesus Christ grow up from?
- Nazareth
- c) Give any **one** activity that Jesus Christ was involved in as a child.
- | | |
|--------------------|-------------------------|
| • Carpentry | • Fetching water |
| • Washing utensils | • Sweeping the compound |
- d) Why did God send Jesus Christ on earth?
- To die for our sins

OR:

- a) Who was the mother of Prophet Muhammad?
• **Aminah**
- b) In which town did Prophet Muhammad grow up from?
• **Mecca**
- c) Give any **one** activity that Prophet Muhammad was involved in as a child.
• **Trade**
• **Washing clothes**
• **Fetching water**
• **Sweeping compound**
• **Washing utensils**
- d) Why did Allah send prophets like Muhammad (P.B.U.H) on earth?
• **To guide people**
• **To offer sacrifices**
• **To link man with God**
• **To intercede for man**
• **To bless people**
• **To calls the unrighteous to repentance.**
• **To receives revelations and directions from the Lord.**
• **To see into the future and foretell coming events**
• **To warn the world for any coming event**
• **To teaches truth**
• **To judge people**
• **To interpret the word of God.**

54. **EITHER:**

List **A** below shows some of the days God took while creating the Universe And List **B** shows what God created on those days but I wrong order.

List **A**

First day

Second day

Third day

Sixth day

List **B**

God created the sky

God created man

God created land, sea and plants

God created light.

Match correctly the day in List **A** to the right creation in List **B**.

- i) First day **God created light.**
- ii) Second day **God created the sky**
- iii) Third day **God created land, sea and plant**
- iv) Sixth day **God created man**

OR:

List **A** below shows some of the days God took while creating the Universe
And List **B** shows what God created on those days but I wrong order.

List A **List B**

First day	Allah created the sky
Second day	Allah created man
Third day	Allah created land, sea and plants
Sixth day	Allah created light.

Match correctly the day in List **A** to the right creation in List **B**.

- | | | |
|-------------|------------|---|
| i) | First day | Allah created light. |
| ii) | Second day | Allah created the sky |
| iii) | Third day | Allah created land, sea and plants |
| iv) | Sixth day | Allah created man |

55. EITHER:

- a) Name the special book God revealed for Christians to use in prayers.
 - **Bible**
- b) Name any **two** writers of the book named in a) above.
 - **Saint Matthew**
 - **Saint Mark**
 - **Saint John**
 - **Saint Luke**
 - **Moses**
- c) Apart from being used in prayers, give **one** other reason why God revealed the above named special book.
 - **For healing the sick**
 - **For chasing away demons**
 - **For preaching the gospel**
 - **For reading**

OR:

- a) Name the special book Allah revealed for Muslims to use in prayers.
 - **Qur'an**
- b) To whom did Allah reveal the following special books?
 - i) Injir **Isa**
 - ii) Zabur **Dauda**
- c) Apart from being used in prayers, give **one** other reason why Allah revealed the above named special book.

<ul style="list-style-type: none">• For chasing away demons• For preaching Islam	<ul style="list-style-type: none">• For reading• For healing the sick
---	--

END

©2025 CONCRETE EXAMINATIONS BOARD (CEB). Don't speak for Quality, let Quality speak for itself. Always ready to change the dynamics in education. Don't miss out, predict.